

O. P. JINDAL SCHOOL, SAVITRI NAGAR
Annual Examination (2023 – 2024)

Class / Section: IV ()

MM: 80

Subject: Social Science

Time: 2Hrs.

Name: _____

Roll No.: _____

Invigilator Sign: _____

Marks Obtained: _____

Examiner Sign: _____

(Fifteen Minutes Extra will be given for reading the Question Paper.)

General Instructions: All questions are compulsory.

I. Tick the correct option.

- 1) The _____ forests are found in the Ganga-Brahmaputra delta. (1)
a) Deciduous b) Evergreen c) Thorn d) Mangrove
- 2) The Gir National Park protects the _____. (1)
a) Snow leopards b) Asiatic lions c) Bengal tiger d) Birds
- 3) Which of these is the main source of freshwater? (1)
a) pond b) lake c) rain d) sea
- 4) What is a wall built across a river called? (1)
a) dam b) canal c) tubewell d) well
- 5) An area that has many oil well are called _____. (1)
a) field b) oilfield c) oil refineries d) factories
- 6) Holes dug to take out ore are called _____. (1)
a) mining b) farming c) fishing d) teaching
- 7) What did the Europeans need from Asia? (1)
a) rice b) minerals c) spices d) fruits
- 8) Where did Vasco da Gama land in India? (1)
a) Kochi b) Calicut c) Jammu d) Chennai

- 9) _____ is the official language of India. (1)
a) Telgu b) Urdu c) Hindi d) Tamil
- 10) Classical music is of _____ types. (1)
a) one b) two c) three d) four
- 11) Which country has the longest-written constitution? (1)
a) Japan b) England c) India d) China
- 12) What are Directive Principles? (1)
a) requests b) guidelines c) instructions d) commands
- 13) A _____ is a civic amenity. (1)
a) hospital b) club c) restaurant d) garden
- 14) The minimum age to vote in a municipal election is ____ years. (1)
a) 25 b) 18 c) 21 d) 20
- 15) Channels which carry water from a river to the fields are called _____. (1)
a) sprinkler b) canals c) dams d) wells
- 16) Children who are less than _____ years of age cannot work. (1)
a) 12 b) 13 c) 14 d) 15
- 17) Local self-governing bodies collect money through _____. (1)
a) taxes b) rent c) donations d) fine

II. Read the paragraph and answer the following questions.

A) Petroleum is found deep inside the earth. Wells are drilled deep to reach the oil. An area with many oil wells is called an oilfield. The mineral oil which is extracted is refined in oil refineries to make petrol, diesel, kerosene and cooking gas. India has oil refineries in Digboi, Mathura, Haldia, Barauni and Mumbai.

1. _____ is found deep inside the earth. (1)
2. An area with many oil wells is called an _____. (1)
3. The mineral oil which is extracted is refined in _____ to make petrol, diesel, kerosene and cooking gas. (1)

4. Name two places where India has oil refineries.

(2)

B) Ferdinand Magellan was a Portuguese explorer. Between 1519 and 1521, he sailed round the world. During this voyage, he discovered a passage between the Atlantic and the Pacific oceans. This passage was later named Strait of Magellan. He was also the first to cross the Pacific Ocean and give it the name.

1. Ferdinand Magellan was a _____ explorer. (1)

2. Between _____ and _____, he sailed round the world. (1)

3. He discovered a passage between the _____ and the _____ oceans. (1)

4. The passage was later named _____. (1)

5. _____ was the first person to cross the Pacific Ocean. (1)

III Answer the following Question.

1) Where do we find thorn, mountain and mangrove forests in India? (1+1+1)

2) How are forests important to us? (3)

3) How are dams useful to us? (3)

4) Why is water essential for life? (3)

5) Into which two groups are minerals divided? Write two examples of each. (2+1)

6) What are cave paintings? What do the paintings at Ajanta caves show? (1+2)

7) What instruments did the sailors use at sea? (3)

8) List three occasions when people perform folk dances. (3)

9) Write any three Fundamental Duties mentioned in our constitution. (3)

10) Where do the local bodies get money from? (3)


11) What are Fundamental Rights? List any four. (1+4)


12) Write five functions performed by local self-governing bodies. (5)

IV. Mark the following location on a physical map of India. (1+1+1)


1. Digboi
2. Mountain Forest
3. Calicut

V. Identify the pictures , write its name and one sentence about it. (2 x 5 = 10)









shutterstock.com • 265603403

